



Everything you
Anytime you
From anyone you
-there will always come a time when you will be grateful
you did.”

CAN

Sarah Caldwell

Summer Holiday Homework is an initiative on our part to enable our students to recapitulate what has been taught and also connects them to the various learning processes. As you enjoy the holidays, help your child to complete the following assignments.

- **Prepare UT – I syllabus for all subjects for exams in July.**

Q1. Solve the crossword with the help of the clues given and paste it in the scrapbook. (for reference –literature Reader)

[illegible]

1

- 4 threaded together on a thin cord
- 2 feeling or showing extreme exertion
- 3 light hearted trick
- 7 more than is necessary
- 8 make a sharp distinct sound

ACROSS

- 5 an activity involving physical exertions
- 1 feeling ashamed
- 6 mentally ill
- 9 make an emotional appeal
- 10 catch one's breath with an open mouth

Q2. I) Match the following idioms and proverbs with their meaning-

A	B
Left out in the cold	Not to be a warm person
Cold hearted	Thinking clearly
Two heads are better than one	Don't feel brave enough
Cold shoulder	Not include someone
In the cold light of the day	It is easier to do something as a team
God help those who help themselves	Make decisions carefully
Break the ice	The coldest part of winter
Have or get cold feet	Work hard to make things done
Look before you leap	Ignore someone
In the dead of winter	Be the first one to do something

II) Fill up the blanks using idioms and proverbs from the above table-

1. I tried to _____ by offering her a drink, but she said no.
2. She _____ when she was asked to recite poem in the class.
3. Anne tried to convince Marilla but she gave her a _____.
4. While the others were playing cards. She was _____.
5. Thousands of men and women were turned out _____ due to earthquake.
6. He couldn't be all that ruthless and _____ if he respected his elders.
7. I know, _____ but I need to find the right partner, not just anyone.
8. You better start preparing for the best because _____.
9. When Pandit Mashai scolded Jagabandhu. He thought in _____ and realized that he was not at fault.

10. It is better to _____ when taking such political stands these days. You never know who is on your side and who will cause you harm.

Q3. Explore current events and roles that heroes are playing in society. Dr. Vikram Sarabhai is considered to be the greatest hero who contributed towards the space programme and is known as the Father of India or Space Programme . Write a short paragraph on your favourite hero whom you consider a real hero in life in a scrapbook . Also mention the following:

- Name
- Profession
- Why you chose him
- Mention the quality that makes him hero
- How he inspires you .
- His achievements and pictures

Note –Do Q1, Q2, Q3, in the scrap book

MATHEMATICS

Find out the distance of 5 famous tourist places in your city from your home, in kilometres (km)

Convert the distance into “m” and “cm” by showing appropriate working of conversions.

- **The above assignment to be done in the Maths notebook.**

SCIENCE

Q1. Given below are pairs of objects used in everyday life. Discuss the properties of material used in them and conclude which is better option.

- a) A steel cup or a ceramic cup to drink hot milk.
- b) A metal or wooden grill in windows.
- c) A cloth bag or a plastic bag to buy vegetables

Q2. Which state of matter do not have a definite shape?

Q3. Differentiate between miscible and immiscible liquids

Q4. How are molecules arranged in the solid state of matter?

Q5. Which material is used in the formation of decorative vases?

Q6. Why are vehicle the source of air pollution?

Q7. How is the balance of oxygen-carbon dioxide maintained in nature?

Q8. Can burning take place without oxygen? Give reason.

Q9. Is air a mixture or a compound? Justify your answer.

Q10 What kind of rays produced by the sun are harmful to all living things?

Q11 What is the importance of light on earth?

Q12. When is shadow formed?

Q13. What are umbra and penumbra region of a shadow?

Q14. In what ways is an image different from shadow?

Q15. Moon is a non-luminous object .why do we see the moon shining in the night sky?

Q16. Why can you not see your image in a wooden table?

Q17. Explain the image formed by a pin hole camera?

Q18. Why do translucent objects such as a butter paper cast a weak shadow?

Q19. Mention the factors on which the shape and size of shadow depends?

Q20. What are deficiency diseases?

Q21. What causes anaemia? What are its symptoms.

Q22. What is malnutrition? How can it be treated?

Q23. Why should fibre form important part of our diet?

Q24. What is importance of water in our diet?

Q25. Explain the main nutrients required by our body?

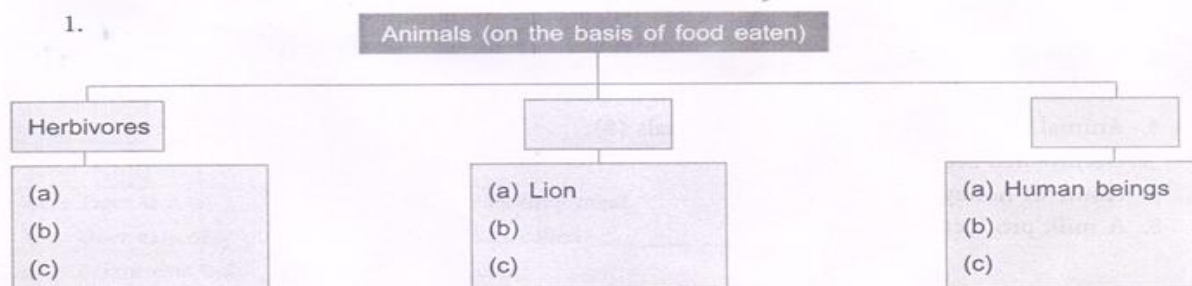
Q26. Sufficient food is not available to all people in our country. At the same time, many people waste food. Can you think of ways by which we can avoid wastage of food.

Q27. Why some foods such as pickle are preserved?

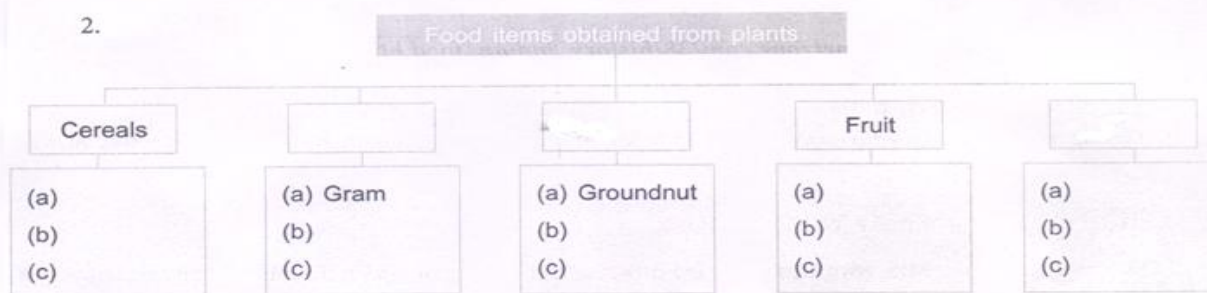
Q28. Why do you think decomposers are important?

Q29. Complete the Web Charts

1.



2.



Q30. Crossword Puzzle


Solve the following crossword puzzle with the help of clues given alongside.

Across

2. A living being which can prepare its own food (8)
7. Animal eating only plants (9)
9. A milk product (6)

Down

1. The substance which we eat (4)
3. Animal that eats other animals (9)
4. Animal that eats both plants and animals (8)
5. Germinated seeds (7)
6. Home of honeybees (7)
8. A milk product (4)



Q.31 • Complete this table.

S. No.	Name of the plant	Part that we eat
1.	mustard plant	
2.		fruit
3.	carrot	
4.	lotus	
5.		leaf
6.		root

- Do the above work in a separate note book.

SOCIAL STUDIES

Globe: Latitude and Longitude. Prepare a project report on a scrapbook and collect the detailed information about the following countries lying in different hemispheres. Your information should contain following details:

List of the countries

- Canada
- Argentina
- India
- New Zealand

Details to be collected

- 1) In which hemisphere they lie
- 2) Weather they are experiencing in the month of June
- 3) Principal food of the countries
- 4) Festivals celebrated.

HINDI

बाल-राम कथा पुस्तक पढ़ें और निम्नलिखित कार्य एक लाइन वाले पेपर पर करके फ़ाइल तैयार करें ।

1. लंका तक हनुमान की यात्रा का वर्णन चित्र सहित करें ।
2. शबरी का राम को बेर खिलाते हुए का चित्र दर्शाएँ और उसका वर्णन करें ।
3. किसी 'मुहल्ले की चहल-पहल' का चित्र अथवा 'बाजार की चहल-पहल' का चित्र चिपका कर 30 -35 शब्दों में चित्र वर्णन करें ।
4. पेड़ -पौधों के बारे में जानकारी प्राप्त करें, कुछ पौधों के बीज या नमूने इकट्ठा करके पेपर पर चिपकाएँ जिन्हें हम आसानी से घर

आँगन में लगा सकते हैं ।

5. भारतीय किसान का महत्त्व और उसके कठिन परिश्रम पर एक अनुच्छेद लिखें ।
6. प्रधानाचार्य को कक्षा विभाग बदलने हेतु प्रार्थना-पत्र तैयार करें ।

विशेष नोट :-- प्रथम इकाई पाठ्यक्रम परीक्षा हेतु याद करें ।

URDU

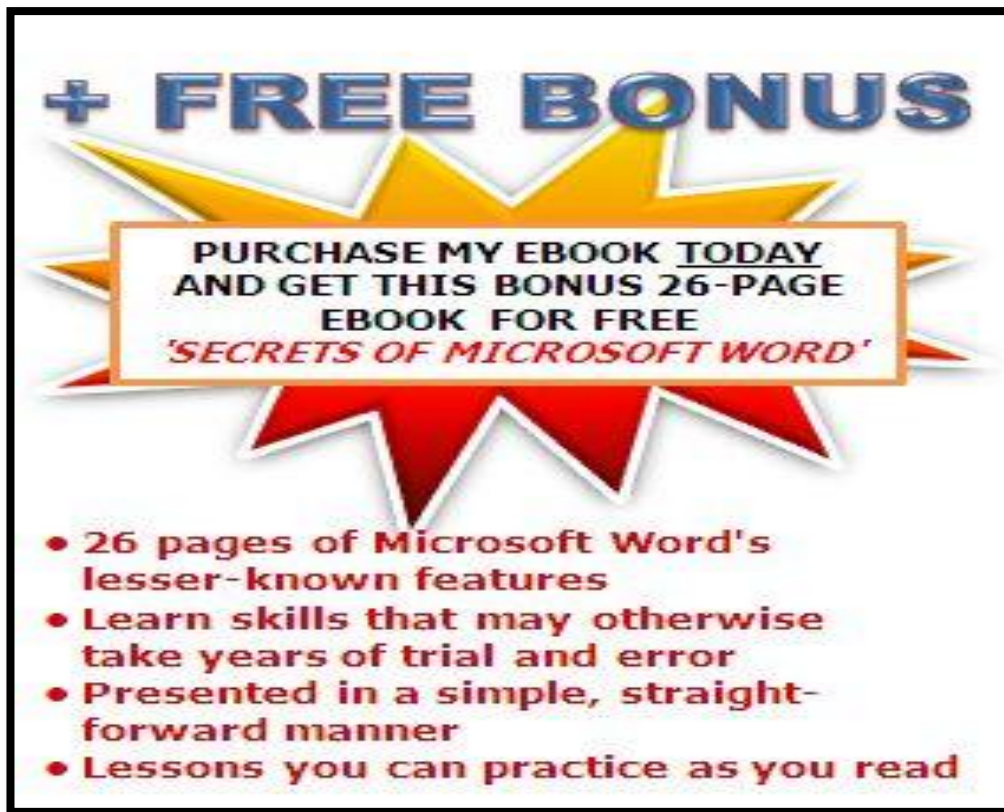
Do page no. 24, 31, 32 of Urdu book.

FRENCH

Learn word meanings given on the last page of the book.

I. T.

Create a poster in Ms Word



→ Take a print out, trim the pages according to the size of your book and paste them between pages 24-25

Note : Deposit holidays homework to Sub. Tr. within a week after summer vacations on computer days in computer period. No child will be given extra time to deposit holidays homework after 23rd July.